



Build a 4-digit number from the parts

Grade 4 Place Value Worksheet

Example: $1,836 = 1,000 + 800 + 30 + 6$

Write the 4-digit numbers

1. _____ $1,000 + 800 + 90 + 3$

2. _____ $7,000 + 700 + 40 + 7$

3. _____ $1,000 + 800 + 10 + 7$

4. _____ $5,000 + 200 + 40 + 2$

5. _____ $2,000 + 200 + 40 + 2$

6. _____ $3,000 + 800 + 40 + 1$

7. _____ $8,000 + 100 + 30 + 8$

8. _____ $4,000 + 600 + 70 + 2$

9. _____ $8,000 + 200 + 90 + 5$

10. _____ $6,000 + 100 + 40$

11. _____ $5,000 + 50$

12. _____ $9,000 + 900 + 80 + 5$

13. _____ $1,000 + 800 + 90 + 2$

14. _____ $4,000 + 400 + 70 + 4$

15. _____ $6,000 + 900 + 10 + 4$

16. _____ $8,000 + 500 + 40 + 1$

17. _____ $2,000 + 900 + 20 + 1$

18. _____ $7,000 + 600 + 80 + 2$



Round numbers 0-10,000 to the nearest 1,000

Grade 4 Rounding Worksheet

Example: 4,689 rounded to the nearest 1,000 is 5,000

Round to the nearest thousand.

1. 1,539 = _____ 2. 8,764 = _____ 3. 3,695 = _____

4. 8,220 = _____ 5. 3,599 = _____ 6. 209 = _____

7. 3,941 = _____ 8. 5,912 = _____ 9. 1,908 = _____

10. 5,388 = _____ 11. 160 = _____ 12. 1,329 = _____

13. 6,273 = _____ 14. 2,046 = _____ 15. 4,218 = _____

16. 9,186 = _____ 17. 7,284 = _____ 18. 1,658 = _____

19. 9,129 = _____ 20. 4,137 = _____ 21. 6,086 = _____



Mixed rounding: round numbers to the underlined digit

Grade 4 Rounding Worksheet

Example: 4,689 rounded to the nearest 1,000 is 5,000

Round to the accuracy of the underlined digit.

1. $5\text{6,}914 = \underline{\hspace{2cm}}$ 2. $77,\text{4}53 = \underline{\hspace{2cm}}$ 3. $6\text{3,}678 = \underline{\hspace{2cm}}$

4. $1\text{9,}113 = \underline{\hspace{2cm}}$ 5. $1\text{5,}003 = \underline{\hspace{2cm}}$ 6. $33,\text{5}75 = \underline{\hspace{2cm}}$

7. $33,\text{4}46 = \underline{\hspace{2cm}}$ 8. $8\text{4,}822 = \underline{\hspace{2cm}}$ 9. $95,\text{1}50 = \underline{\hspace{2cm}}$

10. $49,\text{3}32 = \underline{\hspace{2cm}}$ 11. $\text{3,}655 = \underline{\hspace{2cm}}$ 12. $97,\text{7}22 = \underline{\hspace{2cm}}$

13. $59,\text{8}99 = \underline{\hspace{2cm}}$ 14. $3\text{2,}420 = \underline{\hspace{2cm}}$ 15. $20,\text{1}51 = \underline{\hspace{2cm}}$

16. $2\text{1,}391 = \underline{\hspace{2cm}}$ 17. $7\text{5,}705 = \underline{\hspace{2cm}}$ 18. $57,\text{3}11 = \underline{\hspace{2cm}}$

19. $6\text{7,}195 = \underline{\hspace{2cm}}$ 20. $77,\text{3}03 = \underline{\hspace{2cm}}$ 21. $9\text{0,}205 = \underline{\hspace{2cm}}$



Comparing numbers up to 1 million

Grade 4 Place Value Worksheet

Example: $4,836 > 2,835$

Compare the numbers. Add: $>$ or $<$ or $=$

1. $415,978$ ___ $144,173$

2. $923,476$ ___ $22,786$

3. $123,921$ ___ $514,714$

4. $708,395$ ___ $12,814$

5. $743,677$ ___ $932,721$

6. $55,666$ ___ $675,365$

7. $868,527$ ___ $236,029$

8. $529,133$ ___ $778,352$

9. $381,484$ ___ $485,227$

10. $159,435$ ___ $992,949$

11. $340,844$ ___ $947,317$

12. $77,924$ ___ $476,104$

13. $582,500$ ___ $168,439$

14. $700,179$ ___ $839,243$

15. $962,665$ ___ $251,458$

16. $280,053$ ___ $738,889$

17. $842,782$ ___ $220,852$

18. $886,579$ ___ $13,034$



Adding 3-digit numbers in columns (with regrouping)

Grade 4 Addition Worksheet

Find the sum.

$$\begin{array}{r} 1. \quad 364 \\ + 941 \\ \hline \\ \hline \end{array}$$

$$\begin{array}{r} 2. \quad 470 \\ + 731 \\ \hline \\ \hline \end{array}$$

$$\begin{array}{r} 3. \quad 297 \\ + 972 \\ \hline \\ \hline \end{array}$$

$$\begin{array}{r} 4. \quad 321 \\ + 36 \\ \hline \\ \hline \end{array}$$

$$\begin{array}{r} 5. \quad 221 \\ + 943 \\ \hline \\ \hline \end{array}$$

$$\begin{array}{r} 6. \quad 100 \\ + 263 \\ \hline \\ \hline \end{array}$$

$$\begin{array}{r} 7. \quad 122 \\ + 684 \\ \hline \\ \hline \end{array}$$

$$\begin{array}{r} 8. \quad 818 \\ + 904 \\ \hline \\ \hline \end{array}$$

$$\begin{array}{r} 9. \quad 511 \\ + 790 \\ \hline \\ \hline \end{array}$$

$$\begin{array}{r} 10. \quad 5 \\ + 516 \\ \hline \\ \hline \end{array}$$

$$\begin{array}{r} 11. \quad 504 \\ + 783 \\ \hline \\ \hline \end{array}$$

$$\begin{array}{r} 12. \quad 323 \\ + 71 \\ \hline \\ \hline \end{array}$$

$$\begin{array}{r} 13. \quad 902 \\ + 624 \\ \hline \\ \hline \end{array}$$

$$\begin{array}{r} 14. \quad 187 \\ + 692 \\ \hline \\ \hline \end{array}$$

$$\begin{array}{r} 15. \quad 638 \\ + 491 \\ \hline \\ \hline \end{array}$$

$$\begin{array}{r} 16. \quad 700 \\ + 470 \\ \hline \\ \hline \end{array}$$

$$\begin{array}{r} 17. \quad 164 \\ + 2 \\ \hline \\ \hline \end{array}$$

$$\begin{array}{r} 18. \quad 958 \\ + 954 \\ \hline \\ \hline \end{array}$$

$$\begin{array}{r} 19. \quad 191 \\ + 176 \\ \hline \\ \hline \end{array}$$

$$\begin{array}{r} 20. \quad 283 \\ + 29 \\ \hline \\ \hline \end{array}$$



Subtracting 3-digit numbers, with regrouping

Grade 4 Subtraction Worksheet

Find the difference.

$$\begin{array}{r} 1. \quad 705 \\ - 136 \\ \hline \\ \hline \end{array}$$

$$\begin{array}{r} 2. \quad 253 \\ - 133 \\ \hline \\ \hline \end{array}$$

$$\begin{array}{r} 3. \quad 553 \\ - 298 \\ \hline \\ \hline \end{array}$$

$$\begin{array}{r} 4. \quad 795 \\ - 184 \\ \hline \\ \hline \end{array}$$

$$\begin{array}{r} 5. \quad 251 \\ - 153 \\ \hline \\ \hline \end{array}$$

$$\begin{array}{r} 6. \quad 658 \\ - 296 \\ \hline \\ \hline \end{array}$$

$$\begin{array}{r} 7. \quad 725 \\ - 371 \\ \hline \\ \hline \end{array}$$

$$\begin{array}{r} 8. \quad 556 \\ - 311 \\ \hline \\ \hline \end{array}$$

$$\begin{array}{r} 9. \quad 595 \\ - 488 \\ \hline \\ \hline \end{array}$$

$$\begin{array}{r} 10. \quad 249 \\ - 118 \\ \hline \\ \hline \end{array}$$

$$\begin{array}{r} 11. \quad 426 \\ - 281 \\ \hline \\ \hline \end{array}$$

$$\begin{array}{r} 12. \quad 277 \\ - 170 \\ \hline \\ \hline \end{array}$$



Multiply in columns - 2 digit by 2 digit

Grade 4 Multiplication Worksheet

Find the product.

$$\begin{array}{r} 1. \quad 35 \\ \times 97 \\ \hline \\ \hline \end{array}$$

$$\begin{array}{r} 2. \quad 36 \\ \times 20 \\ \hline \\ \hline \end{array}$$

$$\begin{array}{r} 3. \quad 29 \\ \times 64 \\ \hline \\ \hline \end{array}$$

$$\begin{array}{r} 4. \quad 53 \\ \times 95 \\ \hline \\ \hline \end{array}$$

$$\begin{array}{r} 5. \quad 71 \\ \times 74 \\ \hline \\ \hline \end{array}$$

$$\begin{array}{r} 6. \quad 74 \\ \times 11 \\ \hline \\ \hline \end{array}$$

$$\begin{array}{r} 7. \quad 19 \\ \times 77 \\ \hline \\ \hline \end{array}$$

$$\begin{array}{r} 8. \quad 96 \\ \times 58 \\ \hline \\ \hline \end{array}$$

$$\begin{array}{r} 9. \quad 68 \\ \times 17 \\ \hline \\ \hline \end{array}$$



Long Division with remainders within 1-100

Grade 4 Division Worksheet

Find the quotient with remainder.

1. $5 \overline{)98}$

2. $9 \overline{)58}$

3. $7 \overline{)93}$

4. $4 \overline{)38}$

5. $2 \overline{)68}$

6. $7 \overline{)87}$

7. $4 \overline{)57}$

8. $8 \overline{)29}$

9. $2 \overline{)72}$

10. $4 \overline{)55}$

11. $5 \overline{)99}$

12. $7 \overline{)82}$



Adding fractions (like denominators)

Grade 4 Fractions Worksheet

Find the sum.

1. $\frac{7}{11} + \frac{2}{11} =$ _____

2. $\frac{3}{7} + \frac{2}{7} =$ _____

3. $\frac{2}{9} + \frac{3}{9} =$ _____

4. $\frac{2}{7} + \frac{6}{7} =$ _____

5. $\frac{19}{20} + \frac{19}{20} =$ _____

6. $\frac{24}{25} + \frac{20}{25} =$ _____

7. $\frac{1}{4} + \frac{1}{4} =$ _____

8. $\frac{5}{100} + \frac{9}{100} =$ _____

9. $\frac{5}{8} + \frac{7}{8} =$ _____

10. $\frac{11}{12} + \frac{11}{12} =$ _____

11. $\frac{2}{6} + \frac{5}{6} =$ _____

12. $\frac{1}{2} + \frac{1}{2} =$ _____

13. $\frac{2}{15} + \frac{3}{15} =$ _____

14. $\frac{4}{14} + \frac{6}{14} =$ _____

15. $\frac{11}{13} + \frac{12}{13} =$ _____

16. $\frac{3}{5} + \frac{4}{5} =$ _____

17. $\frac{7}{11} + \frac{5}{11} =$ _____

18. $\frac{1}{3} + \frac{1}{3} =$ _____

19. $\frac{2}{16} + \frac{13}{16} =$ _____

20. $\frac{8}{10} + \frac{5}{10} =$ _____

21. $\frac{6}{50} + \frac{15}{50} =$ _____



Subtracting fractions (like denominators)

Grade 4 Fractions Worksheet

Find the difference.

1. $\frac{10}{12} - \frac{3}{12} =$ _____

2. $\frac{3}{4} - \frac{2}{4} =$ _____

3. $\frac{4}{6} - \frac{3}{6} =$ _____

4. $\frac{6}{10} - \frac{5}{10} =$ _____

5. $\frac{7}{11} - \frac{2}{11} =$ _____

6. $\frac{10}{12} - \frac{4}{12} =$ _____

7. $\frac{8}{9} - \frac{7}{9} =$ _____

8. $\frac{4}{5} - \frac{3}{5} =$ _____

9. $\frac{7}{8} - \frac{6}{8} =$ _____

10. $\frac{2}{3} - \frac{1}{3} =$ _____

11. $\frac{5}{7} - \frac{3}{7} =$ _____

12. $\frac{4}{6} - \frac{1}{6} =$ _____

13. $\frac{7}{9} - \frac{5}{9} =$ _____

14. $\frac{8}{12} - \frac{6}{12} =$ _____

15. $\frac{6}{11} - \frac{4}{11} =$ _____

16. $\frac{4}{10} - \frac{3}{10} =$ _____

17. $\frac{3}{4} - \frac{1}{4} =$ _____

18. $\frac{2}{5} - \frac{1}{5} =$ _____

19. $\frac{6}{7} - \frac{4}{7} =$ _____

20. $\frac{5}{6} - \frac{2}{6} =$ _____

21. $\frac{7}{10} - \frac{2}{10} =$ _____



Comparing decimals

Grade 4 Decimals Worksheet

Compare the numbers. Add: > or < or =

1. 75.8 ___ 0.09

2. 5.03 ___ 22.8

3. 0.37 ___ 8.4

4. 0.3 ___ 3.68

5. 0.03 ___ 0.5

6. 40.8 ___ 0.71

7. 42.7 ___ 36.3

8. 3.74 ___ 96.9

9. 0.07 ___ 1.4

10. 7.1 ___ 95.1

11. 0.07 ___ 5.09

12. 0.6 ___ 7.07



Subtracting decimals (1 decimal digit)

Grade 4 Decimals Worksheet

Find the difference.

1. $7.3 - 0.6 =$ _____

2. $9.1 - 6.8 =$ _____

3. $3.3 - 2.6 =$ _____

4. $5.5 - 0.4 =$ _____

5. $9.2 - 0.5 =$ _____

6. $9.2 - 0.8 =$ _____

7. $6.5 - 4.0 =$ _____

8. $6.5 - 1.8 =$ _____

9. $6.5 - 0.9 =$ _____

10. $9.7 - 8.7 =$ _____

11. $2.8 - 0.4 =$ _____

12. $9.7 - 0.5 =$ _____

13. $8.6 - 6.8 =$ _____

14. $7.8 - 1.4 =$ _____

15. $8.3 - 1.6 =$ _____

16. $7.1 - 0.2 =$ _____

17. $8.1 - 0.5 =$ _____

18. $1.7 - 0.1 =$ _____



Subtracting decimals in columns

Grade 4 Decimals Worksheet

Find the difference.

$$\begin{array}{r} 1. \quad 0.58 \\ - 0.22 \\ \hline \\ \hline \end{array}$$

$$\begin{array}{r} 2. \quad 0.95 \\ - 0.59 \\ \hline \\ \hline \end{array}$$

$$\begin{array}{r} 3. \quad 0.99 \\ - 0.66 \\ \hline \\ \hline \end{array}$$

$$\begin{array}{r} 4. \quad 9.6 \\ - 8.7 \\ \hline \\ \hline \end{array}$$

$$\begin{array}{r} 5. \quad 0.92 \\ - 0.46 \\ \hline \\ \hline \end{array}$$

$$\begin{array}{r} 6. \quad 7.4 \\ - 3.5 \\ \hline \\ \hline \end{array}$$

$$\begin{array}{r} 7. \quad 6.5 \\ - 0.3 \\ \hline \\ \hline \end{array}$$

$$\begin{array}{r} 8. \quad 0.66 \\ - 0.25 \\ \hline \\ \hline \end{array}$$

$$\begin{array}{r} 9. \quad 0.38 \\ - 0.06 \\ \hline \\ \hline \end{array}$$

$$\begin{array}{r} 10. \quad 0.75 \\ - 0.09 \\ \hline \\ \hline \end{array}$$

$$\begin{array}{r} 11. \quad 8.3 \\ - 3.4 \\ \hline \\ \hline \end{array}$$

$$\begin{array}{r} 12. \quad 0.38 \\ - 0.18 \\ \hline \\ \hline \end{array}$$

$$\begin{array}{r} 13. \quad 7.3 \\ - 3.8 \\ \hline \\ \hline \end{array}$$

$$\begin{array}{r} 14. \quad 0.55 \\ - 0.20 \\ \hline \\ \hline \end{array}$$

$$\begin{array}{r} 15. \quad 9.0 \\ - 6.1 \\ \hline \\ \hline \end{array}$$



Adding decimals in columns

Grade 4 Decimals Worksheet

Find the sum.

$$\begin{array}{r} 1. \quad 5.5 \\ + 4.0 \\ \hline \\ \hline \end{array}$$

$$\begin{array}{r} 2. \quad 3.3 \\ + 9.1 \\ \hline \\ \hline \end{array}$$

$$\begin{array}{r} 3. \quad 9.7 \\ + 2.3 \\ \hline \\ \hline \end{array}$$

$$\begin{array}{r} 4. \quad 1.0 \\ + 4.9 \\ \hline \\ \hline \end{array}$$

$$\begin{array}{r} 5. \quad 6.7 \\ + 7.3 \\ \hline \\ \hline \end{array}$$

$$\begin{array}{r} 6. \quad 0.91 \\ + 0.41 \\ \hline \\ \hline \end{array}$$

$$\begin{array}{r} 7. \quad 9.5 \\ + 7.1 \\ \hline \\ \hline \end{array}$$

$$\begin{array}{r} 8. \quad 4.8 \\ + 0.1 \\ \hline \\ \hline \end{array}$$

$$\begin{array}{r} 9. \quad 0.71 \\ + 0.02 \\ \hline \\ \hline \end{array}$$

$$\begin{array}{r} 10. \quad 9.1 \\ + 2.0 \\ \hline \\ \hline \end{array}$$

$$\begin{array}{r} 11. \quad 7.4 \\ + 4.1 \\ \hline \\ \hline \end{array}$$

$$\begin{array}{r} 12. \quad 0.23 \\ + 0.08 \\ \hline \\ \hline \end{array}$$

$$\begin{array}{r} 13. \quad 6.6 \\ + 2.1 \\ \hline \\ \hline \end{array}$$

$$\begin{array}{r} 14. \quad 7.8 \\ + 0.8 \\ \hline \\ \hline \end{array}$$

$$\begin{array}{r} 15. \quad 3.9 \\ + 6.0 \\ \hline \\ \hline \end{array}$$

$$\begin{array}{r} 16. \quad 8.5 \\ + 1.5 \\ \hline \\ \hline \end{array}$$

$$\begin{array}{r} 17. \quad 7.9 \\ + 0.9 \\ \hline \\ \hline \end{array}$$

$$\begin{array}{r} 18. \quad 5.0 \\ + 0.3 \\ \hline \\ \hline \end{array}$$

$$\begin{array}{r} 19. \quad 5.7 \\ + 0.8 \\ \hline \\ \hline \end{array}$$

$$\begin{array}{r} 20. \quad 2.9 \\ + 6.4 \\ \hline \\ \hline \end{array}$$

Reading a calendar

Grade 3 Time Worksheet

Answer the questions according to the calendar.

March

Sun	Mon	Tue	Wed	Thu	Fri	Sat
1	2	3	4	5	6	7
8	9	10	11	12	13	14
15	16	17	18	19	20	21
22	23	24	25	26	27	28
29	30	31	1	2	3	4

1. The bill is due on the first Friday of March. What is the due date of the bill?

2. Emma forgot to pay the bill on time. She paid the bill when it was three days overdue. When did she pay the bill?

3. What is the date of the last Monday of March?

4. Which day of the week is March 29th?

5. Which day of the week is March 14th?

6. How many Wednesdays are there in March?

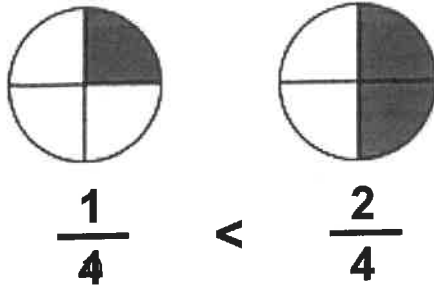
7. How many days are there in March?

Comparing fractions with same denominator

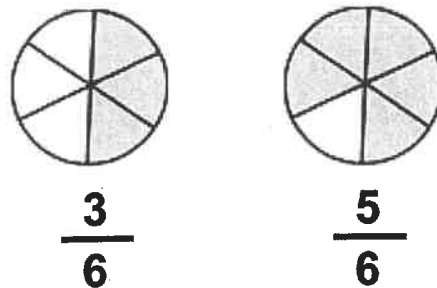
Grade 3 Fractions Worksheet

Write > (greater than), < (less than) or = (equal to) between the fractions.

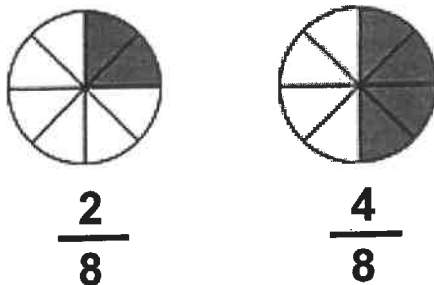
1)



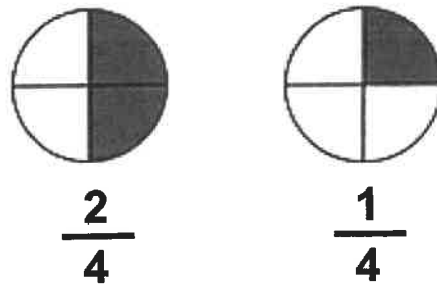
2)



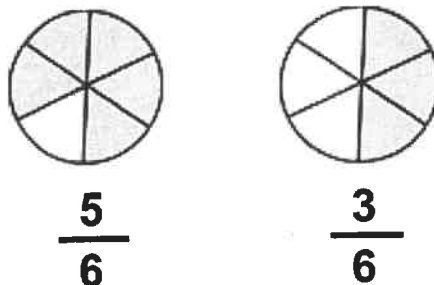
3)



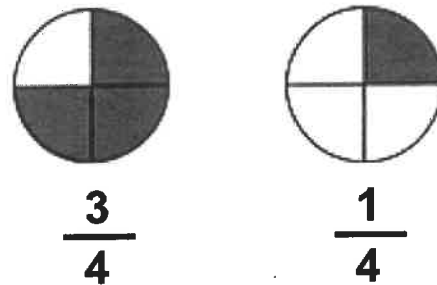
4)



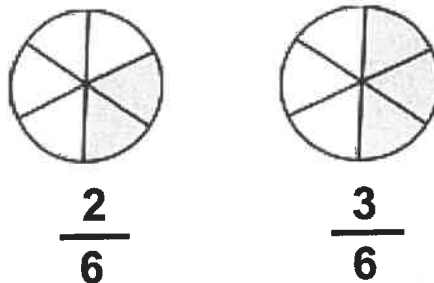
5)



6)



7)



8)

